

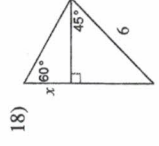
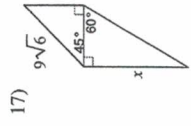
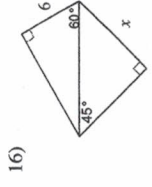
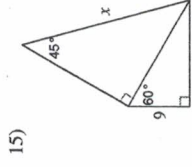
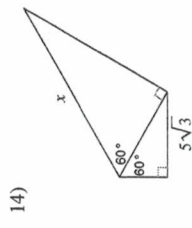
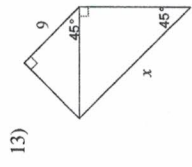
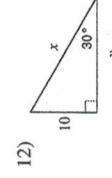
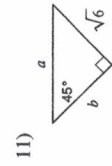
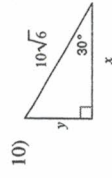
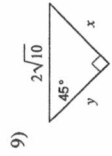
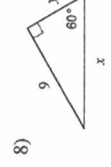
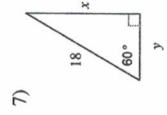
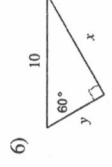
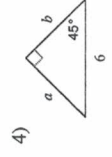
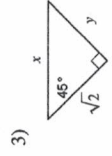
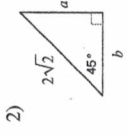
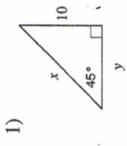
Name \_\_\_\_\_

Math 2 **6.2**

Special Right Triangles WS

© 2013 Kuta Software LLC. All rights reserved.

Find the missing side lengths. Leave your answers as radicals in simplest form.



19) A square has a diagonal length 18 in. What is the side length of the square?

20) An equilateral triangle has a height of 24 cm. What is the length of each side of the triangle?