
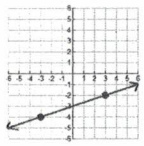
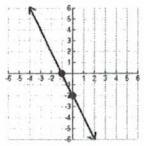


Use the given information to transform each line into the three forms. **MUST SHOW WORK!!**

Given Information	Point-Slope Form	Slope-Intercept Form	Standard Form
1.) (0, 4) and (6, 10)			
2.) (-4, 0) and (5, -18)			
3.) 			
4.) x-int: -3 and y-int: -4			
5.) 			
6.) (-4, -2) and (0, -3)			
7.) slope = -4 and goes through origin			
8.) (-1, 2) and (7, -2)			
9.) 			
10.) (5, 4) and (-5, 0)			